

padlet

fantastic four

May assignments

RIVERSIDE4 NOV 28, 2018 02:06AM

day 1 week 1 (May 4)

ANONYMOUS APR 08, 2020 06:13PM

Writing: (Opinion Day 1) Brainstorming- "Should There be Homework"

Use the box provided to **Brainstorm** reasons why or why not students should be given homework.

Writing Week #1 May 4-8 writing #1 Day 1

OPINION

Use the box to **brainstorm** all of your thoughts on this topic. You can make a list, use a mind map, or just write ideas as they come to you. Don't worry about using complete sentences, correct spelling or writing neatly.

Should There be Homework?
Do you think kids in your grade should have homework? Write a paragraph about your opinion on this topic.

Remember: You will need to form a clear opinion about the topic and then support that opinion with facts, details, and examples.

Put a star ★ next to ideas you think you will use. Put an X next to ideas you probably will not use.

Track your progress

- Brainstorm
- Organize
- First Draft
- Edit and Revise
- Final Draft

May Writing W1 Opinion Day1

PDF document

PADLET DRIVE

RIVERSIDE4 APR 09, 2020 06:40PM

Math - factors/multiples

Name: _____ Date: _____ **4.OA.4**

Factors & Multiples

List the factors of each number and state if it is prime or composite.

1. 30	2. 32	3. 23
4. 56	5. 11	6. 21

school closure math May wk1 day1

PDF document

PADLET DRIVE

RIVERSIDE4 APR 09, 2020 06:44PM

Math video factors and multiples

Numbers

FACTORS & MULTIPLES

Multiples of 20:

20 x 1	=	20
20 x 2	=	40
20 x 3	=	60
20 x 4	=	80
20 x 5	=	100

Factors & Multiples | Number | Maths | FuseSchool
by FuseSchool - Global Education

YOUTUBE

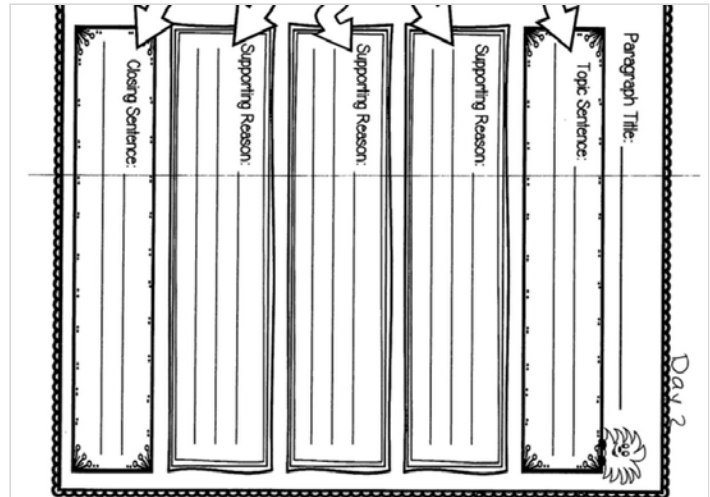
RTS4 APR 16, 2020 09:03PM

Reading - Inference

First, use the **Pre-Writing** to organize your ideas into sentences.

Then, write you **First Draft** by using the Pre-Writing page to put all of your sentences together into a **First Draft**.

Finally, make sure you check each box from the check list on the First Draft page. Use **colors to label** the books to make sure you are not missing anything.



May Writing W1 Opinion Day2.

PDF document

PADLET DRIVE

ANONYMOUS APR 08, 2020 09:04PM

Writing: (Opinion) Transition/Linking Words

Here is a list of Transition/Linking/Starter Words to using for the beginning of your sentences. It is important that you use this words.

Read the passage and answer the question. Write your answer in a complete sentence.

1. Sherry went into the room to check on her next patient. She took the man's temperature and blood pressure. She then asked him what was wrong. The man replied, " I am not feeling well today. My throat is sore." Sherry typed everything in her computer and said the doctor will be right in. What is Sherry's job?

2. Suzie grabbed her bat bag from her closet and headed out the door. Today was the big game against their rival school. She was confident her team would win, but she knew she would have to play her heart out in order for that to happen. Maybe today she would hit her first homerun! What sport does Suzie play?

school closure ELA wk1 day1
 PDF document
 PADLET DRIVE

KATLYN FIELD APR 10, 2020 05:58PM

Science: The Rock Cycle

On these pages you are going to read and answer questions about the rock cycle.

THE ROCK CYCLE

The rock cycle changes rock. It changes rock from one type to another. A rock is a solid mixture of minerals. There are three types of rocks. There are different ways that rocks can be changed.

Weathering changes rocks. Weathering wears away rock. This happens over time. Wind breaks down rocks. Ice breaks down rocks. Rain breaks down rocks. Rocks are broken into tiny pieces. Tiny pieces are called sediment. Sediment contains sand. Sediment contains mud. Sand contains pebbles. Sediment contains the remains of plants. Sediment contains the remains of animals. Layers of sediment form sedimentary rock. Sediment is pressed together by time. Sediment is pressed together by pressure. Sedimentary rocks forms only on Earth's crust.

Wind and precipitation carry sediment from rocks. Wind and precipitation deposit sediment in a new place. Layers of sediment collect on each other. New layers push down old layers. Mineral water seeps into cracks and holes of sediment. Dried mineral water forms rock.

Older layers of sediment are pushed deep into the earth. Below the crust of earth is the mantle. Between the crust and mantle contains much hotter temperatures. There is a lot of pressure under Earth's crust. Sedimentary rock is changed. It changes into metamorphic rock. It changes as the pressure and heat increases. Metamorphic rock is a type of rock. It changes

Day 1 Types of Rock
 PDF document
 PADLET DRIVE

day 2-week 1 (May 5)

ANONYMOUS APR 08, 2020 06:26PM

Writing: (Opinion Day 2) Pre-Writing and First Draft- "Should There be Homework"

Transition Words: In Opinion Writing

Introduction + Thesis: Presenting your Opinion

- I believe...
- I think...
- In my opinion...
- I feel...
- I am convinced...
- I prefer...
- My favorite...
- The best...

Reasons: Explaining why you have your Opinion

<p>1.</p> <ul style="list-style-type: none"> • First, • To begin with, • To start, • First of all, • One reason is 	<p>2.</p> <ul style="list-style-type: none"> • Second, • Next, • Another reason is • In addition, • Also, 	<p>3.</p> <ul style="list-style-type: none"> • Third, • Finally, • Lastly, • Most importantly, • One last reason is
--	---	---

Evidence: Specific Proof for each Reason

TransitionWordsforOpinionWriting
PDF document
PADLET DRIVE

.2, .4, .6 __, __, __
 .1, .2, .3, __, __, __
 .25, .5, .75, __, __, __
 2.50, 5, 7.50, __
 64, 32, 16, __, __, __
 900, 450, 225, __, __, __

4th Grade Number Patterns Lesson 4 Math Specialists in Fullerton
by Connect the Dots Learning, LLC
YOUTUBE

RTS4 APR 16, 2020 09:02PM

Reading

Support from Informational Text

RIVERSIDE4 APR 09, 2020 06:40PM

Math - finding/completing patterns

Name: _____ Date: _____ 4.OA.5

Patterns

Use the rule to write the first 5 terms in the pattern.

1. Rule: Add 3 First term: 9

2. Rule : multiply by 2, subtract 1 First term: 3

Draw the next 3 figures in the pattern.

3.

Write the next 3 numbers and the rule for the pattern.

school closure math May wk1 day 2
PDF document
PADLET DRIVE

Day 2
Name: _____ Date: _____ R.I.4.1

Support from Informational Text

Read the following passage and answer the questions.

Kangaroos are marsupial animals that are found in Australia, as well as New Guinea. There are four different kangaroo species; the red kangaroo, eastern grey kangaroo, western grey kangaroo and the antilopine kangaroo. Kangaroos can hop quickly on two legs or walk around slowly on all four. They can not walk backwards. Their legs are so powerful it could be dangerous. Kangaroos like to eat grass and swim.

1. What is a kangaroo?

school closure ELA wk1 day 2
PDF document
PADLET DRIVE

KATLYN FIELD APR 10, 2020 05:58PM

Science: Types of Rock

Use the reading passage from Day 1 to help you fill in the crossword. Then there is an EXTRA activity you may choose to do: sorting the examples of rocks into their correct category.

Writing: (Narrative Day 1) Brainstorming-"I was so Surprised!"

Use the box provided to **Brainstorm** about a time when you felt surprised. It can be about a good surprise or one that was not so good.

The template is titled "NARRATIVE" and "Day 1". It includes a large box for writing a paragraph about a surprising event. A checklist for "Track your progress" includes: Brainstorm, Organize, First Draft, Edit and Revise, and Final Draft. A speech bubble says "Remember: You will need to narrate an event or experience using descriptions and details to tell the story." There are also instructions to use stars for ideas to use and X's for ideas not to use.

May Writing W1 Narrative Day1

PDF document

PADLET DRIVE

RIVERSIDE4 APR 09, 2020 06:40PM

Math - place value review

The worksheet is for "4.NBT.1" and asks for Name and Date. It focuses on "Place Value" and asks to "Find the value of the underlined digit." It lists six problems involving numbers with underlined digits. Below, it asks to "Compare the values of the underlined digits" with two more problems.

school closure math May wk1 day 3

PDF document

PADLET DRIVE

RIVERSIDE4 APR 09, 2020 06:51PM

Math - place value and comparing

The crossword puzzle is titled "rocks & minerals". It features a central illustration of a rock cycle diagram with a volcano, a mountain, and a person. The crossword grid has numbered squares for words.

Day 2 Crossword and Vocab

PDF document

PADLET DRIVE

day 3-week 1 (May 6)

ANONYMOUS APR 08, 2020 06:13PM

Writing: (Opinion Day 3) Final Draft with Picture- "Should There be Homework"

Before writing your **Final Draft** and **Drawing a Picture**, please make sure you look over your first draft. Correct spelling, have a sibling or parent read over it and help you, or type it out onto Word!

The template is for "Day 3" and features a large box for writing and a smaller box for drawing a picture. The word "by" is written at the bottom right of the writing area.

Writing Final Draft with Picture

PDF document

PADLET DRIVE

ANONYMOUS APR 08, 2020 06:16PM

So we have looked at numbers in

- Standard form ...**
1,234
- Word form**
One thousand,
two hundred and
thirty four
- in Base 10 form**
- And in Expanded form**
 $1000 + 200 + 30 + 4$

Now we are going to move on and compare numbers using one or more of these expressions.

4NBT2 Place Value Number Comparison Full Lesson Video
by Elementary All In One Math
YOUTUBE

Cause: _____
Effect: _____

2. Dora swung the bat so hard, the ball went flying over the fence.
Cause: _____
Effect: _____

3. The clouds were getting dark outside, so all the kids got out of the pool.
Cause: _____
Effect: _____

4. Brad did not eat breakfast, so his stomach began to _____

school closure ELA wk1 day 3
PDF document
PADLET DRIVE

RIVERSIDE4 APR 16, 2020 09:16PM

Reading - cause and effect

watch the video then complete the worksheet

Try it!

Let's try finding cause and effect relationships in a story using clue words....

Cause and Effect
by Blackman Sparks Learning Channel
YOUTUBE

RTS4 APR 16, 2020 09:04PM

Reading

Cause and Effect

KATLYN FIELD APR 10, 2020 05:57PM

Science: Types of Rock

An organizer was given, describing Igneous, Metamorphic, and Sedimentary rocks. Use it to help you answer the questions.

OF ROCKS

Sedimentary	<ul style="list-style-type: none"> Sedimentary rocks are made from little fragments of rock, sand, and mud that might have been eroded and the remains of tiny sea animals. Over millions of years, they are compressed into blocks of rock, such as sandstone, limestone, and shale. Sedimentary rocks, such as limestone, form in compressed layers of warm-water rock. Many sedimentary rocks have had great economic value. Coal is sedimentary rock, powered much of the Industrial Revolution. Geologists can look at sedimentary rocks and can identify the conditions of life during certain periods in history. Many sedimentary rocks are made from particles that have been eroded or weathered from pre-existing rocks. A synonym for sedimentary rocks is secondary rocks, because the rocks are the remains of former rocks. Sedimentary rocks are best recognized by their layers. Fossils are found only in sedimentary rocks. Sedimentary rocks form mostly at the bottom of seas and lakes.
Metamorphic	<ul style="list-style-type: none"> Igneous or sedimentary rocks are changed or destroyed by weather or water at the surface of the earth. They can be changed or destroyed by weather or water at the surface of the earth. They are melted by which they are formed. Rocks go through what is referred to as metamorphism. They are formed by the effects of heat and pressure, and the change from one type of rock to another. They are formed by the effects of heat and pressure, and the change from one type of rock to another. They are formed by the effects of heat and pressure, and the change from one type of rock to another. They are formed by the effects of heat and pressure, and the change from one type of rock to another.

Day 3 Organizer and Questions
PDF document
PADLET DRIVE

day 4-week 1 (May 7)

ANONYMOUS APR 08, 2020 06:26PM

Writing: (Narrative Day 2) Pre-Writing and First Draft- "I was so Surprised!"

First, use the **Pre-Writing** to organize your ideas into sentences.

Then, write your **First Draft** by using the Pre-Writing page to put all of your sentences together into a **First Draft**.

Finally, make sure you check each box from the check list on the First Draft page. Use **colors to label** the books to make sure you are not missing anything.

Day 2

NARRATIVE

Use your brainstorming ideas to organize your thoughts.

Introduce your topic and catch your reader's attention.

Tell about the event or experience in order, using description and detail.

Finish with a conclusion that wraps up the story.

Paragraph Title: _____

Topic Sentence: _____

Beginning: _____

Middle: _____

End: _____

Closing Sentence: _____

May Writing W1 Narrative Day2.
 PDF document
 PADLET DRIVE

4.NBT.2

So we have looked at numbers in

- Standard form ...
1,234
- Word form
One thousand, two hundred and thirty four
- in Base 10 form
- And in Expanded form
1000 + 200 + 30 + 4

Thousands	Hundreds	Tens	Ones
1	2	3	4

Now we are going to move on and compare numbers using one or more of these expressions.

www.khanacademy.org/math

4NBT2 Place Value Number Comparison Full Lesson Video
 by Elementary All In One Math
 YOUTUBE

RTS4 APR 16, 2020 09:04PM

Reading

Text Structures

- A bully is someone who hurts or intimidates another child over and over again. A bully enjoys feeling the power of making another person feel bad.
- Madison is outgoing and talkative in school, but her brother Matthew is more shy and serious. Madison seems to have more friends than Matthew because she tries harder to make friends. Matthew sits at lunch working on his homework, so he does not have to communicate with anyone.
- What should you do when you witness a bully? First you should try to ask the bully to stop. If that does not work, then you should inform a teacher or an adult who can help you. You should always come

school closure ELA wk1 day 4
 PDF document
 PADLET DRIVE

RIVERSIDE4 APR 09, 2020 06:39PM

Math write/compare numbers

Name: _____ Date: _____ 4.NBT.2

Write & Compare Numbers

Write the number in expanded form.

- 6,984 _____
- 98,046 _____

Write in standard form.

- $900 + 30 + 7$ _____
- $70,000 + 600 + 80 + 2$ _____

Write in word form.

- 403 _____

school closure math May wk1 day 4
 PDF document
 PADLET DRIVE

KATLYN FIELD APR 10, 2020 05:57PM

Science: Minerals

Use the reading passage and vocabulary sheet to help you answer the questions and fill out the crossword.

RIVERSIDE4 APR 09, 2020 06:52PM

Math - place value/comparing continued

MINERALS AND THEIR PROPERTIES

Minerals are found on Earth. They are a solid material with tiny patterns or called crystals. They are not alive. They are made from earth or in Earth's mantle. You can find minerals in every part of your body. Minerals must have certain properties. A property describes a mineral.


The luster of a mineral tells how shiny that the mineral is. Luster means reflects light. Some minerals can be dull. This means that the mineral is not shiny and does not give off light. Other minerals can be shiny like aluminum.

The color of a mineral may help you to know what it is. Look at a mineral and scratch it on a streak plate. The mineral leaves a strange color. Look at the powder that is left after you scratch the mineral against something hard called the mineral's streak. The streak and the color of the mineral is sometimes the same. Sometimes it is not. You can tell fool's gold from real gold this way. Fool's gold leaves a black or dark green streak. Real gold has a yellow streak.

Cleavage is how a mineral can split into flat surfaces or sheets. A mineral has cleavage in all of the same direction. They split into thin sheets.

Moh's Hardness Scale is a scale. It can show you how hard a mineral is. Effort is one, the softest, and goes to ten, the hardest. Talc is a soft mineral. Scratch it with your fingernail. It breaks very easily. A diamond is the hardest mineral with a higher number can scratch a mineral with a lower number. It is another helpful way to identify a mineral.

Minerals can be used in many ways. Some are used to make musical instruments, jewelry, or wires for electricity. Copper must be refined. It can be very useful after it is refined into copper. It becomes pennies, pots or pans, and water pipes.



Day 4 Minerals reading, crossword, vocab

PDF document

PADLET DRIVE

Round the number to place value of the underlined digit.

5. 349,685 _____ 6. 9,523 _____

7. 74,086 _____ 8. 764,328 _____

Solve the problem.

9. A stadium seats about 8,364,852 people for the football game. What is 8,364,852 rounded to the nearest ten thousand?

10. The furniture company makes about \$800,000 per year in sales. When rounded to the nearest hundred thousand, what is the greatest whole number that rounds to \$800,000?

school closure math May wk1 day 5

PDF document

PADLET DRIVE

day 5 - week 1 (May 8)

ANONYMOUS APR 08, 2020 06:21PM

Writing: (Narrative Day 3) Final Draft with Picture- "I was so Surprised!"

Before writing your **Final Draft** and **Drawing a Picture**, please make sure you look over your first draft. Correct spelling, have a sibling or parent read over it and help you, or type it out onto Word!

Day 3

by _____

Writing Final Draft with Picture

PDF document

PADLET DRIVE

RIVERSIDE4 APR 09, 2020 06:40PM

Math rounding numbers

RIVERSIDE4 APR 09, 2020 06:55PM

Math - rounding video



Math Antics - Rounding

by mathantics

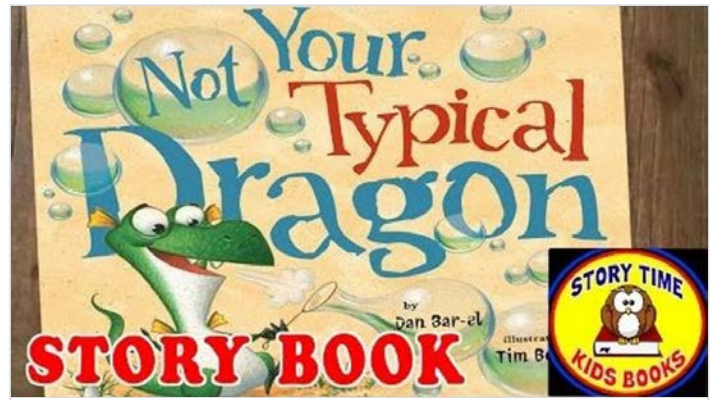
YOUTUBE

RIVERSIDE4 APR 09, 2020 06:58PM

Math - rounding number rock song



Rounding Numbers Song: Nearest 10 & 100 - NUMBEROCK
 by NUMBEROCK Math Songs
 YOUTUBE



Not Your Typical Dragon Story Books for Children Read Aloud Out Loud
 by Polka Dot Tots
 YOUTUBE

RTS4 APR 16, 2020 09:05PM

Reading

Reading Comprehension

Day 5
 Name: _____ Date: _____ R.I.4.10

Reading Comprehension

Read the passage. Use the information to answer the questions.

The wheelchair is an important invention for many. It helps people who are unable to get around using their feet to sit in a chair and wheel themselves from one place to another. The first wheelchair patent was issued in the United States in 1869. It was not until 1993 that Herbert Everest and Harry Jennings invented the first steel lightweight collapsible wheelchair. There are an estimated 3.3 million wheelchair users in the United States alone. 1.825 million wheelchair users are at least 65 years old. One of our presidents even used a wheelchair for everyday life. Franklin Delano Roosevelt was stricken with Polio at age 39, which left him in a wheelchair.

Answer the following questions.

1. What did Herbert Everest and Harry Jennings invent?

school closure ELA wk1 day5
 PDF document
 PADLET DRIVE

RIVERSIDE4 APR 16, 2020 09:20PM

Reading - comprehension

listen to the story then write a 1-2 paragraph summary

KATLYN FIELD APR 10, 2020 05:58PM

Science: Minerals

Use the organizer given to help you answer the questions about how minerals are used.

f Minerals	Aluminum	cars, planes, automobiles, sports equipment
	Coal	source of energy
	Copper	wire, brass, bronze, coins, jewelry, cooking utensils
	Gold	jewelry, dentistry, medicine, coins, computers, electronics
	Graphite	pencil "lead"
	Gypsum	sheetrock in walls
	Iron	steel for cars, cans, construction, appliances
	Lead	batteries, radiation shielding, pencils
	Limestone	cement, stomach medicine
	Marble	construction, household items
Clay	food, preserving of food, ice melt, water	

Day 5 Use of Minerals
 PDF document
 PADLET DRIVE

day 6- week 2 (May 11)

RIVERSIDE4 APR 13, 2020 10:30PM

math - add and subtract whole numbers

3. $784,654 + 584,674$ 4. $62,314 + 21,687$ 5. $4,674 + 5,008$

Find the difference of the two numbers.

6. $672,009 - 209,959$ 7. $57,684 - 49,998$ 8. $4,674 - 3,789$

Solve each problem.

9. Mikayla drank 38 ounces of water on Monday and 54 ounces on Tuesday. How much more water did she drink on Tuesday?

10. There are 13,789 people sitting in orchestra seats and 7,649 people sitting in mezzanine seats for the music concert. How

school closure math wk2 day 1

PDF document

PADLET DRIVE

Day 6 Name: _____ Date: _____ **R.I.4.2**

Main ideas and Details

Read the following passage and answer the questions.

Kangaroos are marsupial animals that are found in Australia, as well as New Guinea. There are four different kangaroo species; the red kangaroo, eastern grey kangaroo, western grey kangaroo and the antilopine kangaroo. Kangaroos can hop quickly on two legs or walk around slowly on all four. They can not walk backwards. Their legs are so powerful it could be dangerous. Kangaroos like to eat grass and swim.

1. What is the main idea of this passage?

school closure ELA wk2 day1

PDF document

PADLET DRIVE

KATLYN FIELD APR 14, 2020 05:30PM

Science: The Sun

Read the passage about the sun to answer the given questions about it.

The Sun

The sun is a star. The sun is the center of our solar system. It makes up 99.8% of the mass of the entire solar system. The sun is much larger than the Earth. If the sun were as tall as a typical front door, Earth would be about the size of a nickel. The sun is not a solid body. Different parts of the sun rotate at different rates. The sun spins once about every 25 days at its equator. The sun rotates once on its axis every 36 Earth days at its poles.

A star does not have a solid surface. It is a ball of gas (92% hydrogen and 8% helium) held together by its own gravity. The sun has an atmosphere. It is a solar atmosphere made of a thin layer of gases. This is where we see features such as sunspots and solar flares on the sun. The sun is not a planet. Therefore, it does not have any moons. The sun is orbited by eight planets, at least five dwarf planets, tens of thousands of asteroids, and hundreds of thousands to three trillion comets and icy bodies. The sun does not have any rings.

Several spacecraft keep the sun under constant observation. They are learning its secrets. They warn Earth about dangerous space weather. Without the sun's intense energy there would be no life on Earth. The temperature at the sun's core is about 27 million degrees Fahrenheit (15 million degrees Celsius).

There are many connections and interactions between the sun and Earth. It drives the seasons, ocean currents, and weather and climate. It also influences radiation belts and aurorae. The sun is special to us. However, there are billions of stars just like our sun scattered across the Milky Way galaxy. It is just one of billions. The sun itself is not a place that could ever have living things on it. This is because of its hot and energetic mix of gases and plasma. The sun has made life on Earth possible. It provides warmth as well as energy. Organisms like plants use this energy to form the basis of many food chains.

Many ancient cultures built stone structures or modified natural rock formations to mark the motions of the sun. They charted the seasons. They created calendars. They monitored solar and lunar eclipses. The sun and its patterns gave them many types of information over time.

Day 6 The Sun

PDF document

PADLET DRIVE

RIVERSIDE4 APR 16, 2020 05:27PM

Grammar quotation marks

Day 6 Name: _____ Date: _____ **L.4.2.B**

Quotation Marks

Rewrite the sentences using the correct quotation marks, commas, and capitals.

1. Henry asked when are we going to the movies?

2. The teacher said take out your homework.

3. Make sure you close the door Mom yelled.

school closure grammar wk2 day 1

PDF document

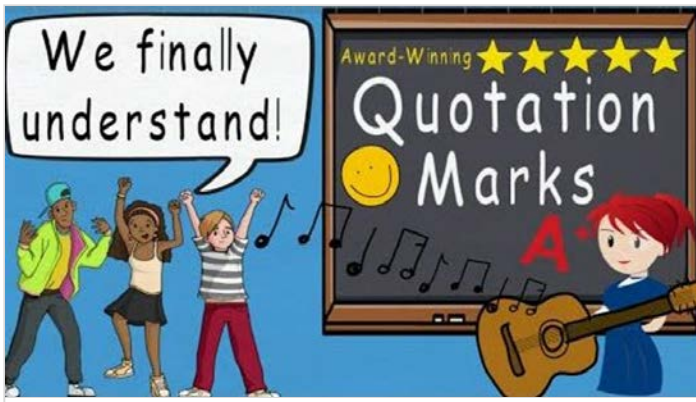
PADLET DRIVE

RIVERSIDE4 APR 16, 2020 05:34PM

Grammar quotation mark video

ANONYMOUS APR 15, 2020 11:02PM

Reading - main idea



Quotations Song (Quotation Marks by Melissa)

This song illustrates how to punctuate dialog correctly using quotation marks. The silly dialog between the storm trooper action figure and the man with the toga give an air of comedy to the topic. Students enjoy using this video as a unique learning tool.

YOUTUBE

Name: _____ Date: _____ 4.NBT.5

Multiply Whole Numbers

Multiply.

1. 64×36	2. 58×24	3. 87×29
4. 67×3	5. 891×7	6. $8,467 \times 5$
7. 600×7	8. $8,000 \times 5$	9. $70,000 \times 4$

school closure math wk2 day 2

PDF document

PADLET DRIVE

ANONYMOUS APR 17, 2020 11:22PM

Writing: Week 2 May 11-15 (Opinion Day 1) Brainstorming "Eliminate that Rule!"

Use the box provided to **Brainstorm** reasons about a rule that you have at school or at home and should be eliminated.

Writing Week #2 May 11-15

OPINION

Use the box to brainstorm all of your thoughts on this topic. You can make a list, use a mind map, or just write ideas as they come to you. Don't worry about using complete sentences, correct spelling or writing neatly.

Eliminate that Rule!

Write a paragraph about a rule that you have to follow (either at school or at home), that you think should be eliminated.

Remember: You will need to form a clear opinion about the topic and then support that opinion with facts, details, and examples.

Track your progress

- Brainstorm
- Organize
- First Draft
- Edit and Revise
- Final Draft

Put a star ★ next to ideas you think you will use. Put an X next to ideas you probably will not use.

May Writing W2 Opinion Day1

PDF document

PADLET DRIVE

ANONYMOUS APR 16, 2020 07:51PM

Math multiply 2digits by 2 digits

Multiplying 2-digit numbers

Khan Academy

Multiplying: 2 digit numbers | Multiplication and division | 4th grade | Khan Academy

by Khan Academy

YOUTUBE

KATLYN FIELD APR 14, 2020 05:31PM

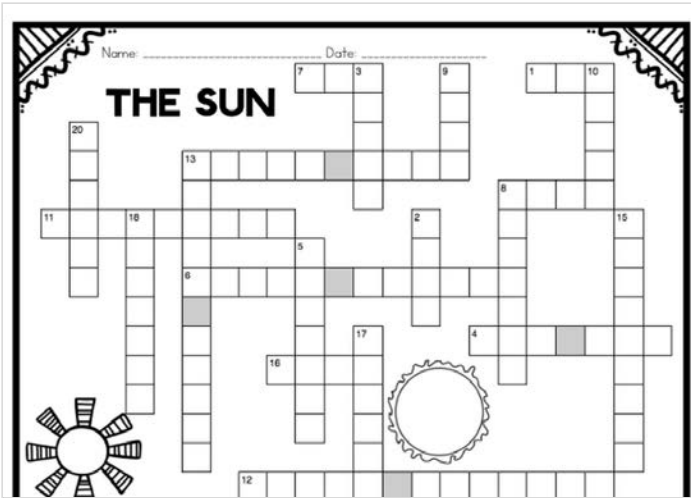
Science: The Sun

Crossword puzzle on vocabulary used about the sun.

day 7-week 2 (May 12)

RIVERSIDE4 APR 13, 2020 10:31PM

math - multiply whole numbers



Day 7 Sun Crossword

PDF document

PADLET DRIVE


1. Emma was happy that her family was coming over for dinner.

2. That cupcake tasted really good!

3. The girl that sat next to me was so nice.

4. I looked around the room to see where everything was.

Write a sentence to convey the emotion in parentheses.

5. (Surprise) 

school closure grammar wk3 day 2

PDF document

PADLET DRIVE

ANONYMOUS APR 15, 2020 11:23PM


Reading- timeline

Day 7
Name: _____ Date: _____ R.I.4.5

Timeline

Fill in this timeline about your life. Start by listing important events and the year it occurred. Use the information to put the events in chronological order by writing the date of the event on the bottom and the name of the event on top.

1. _____
2. _____
3. _____
4. _____



school closure ELA wk2 day 2

PDF document

PADLET DRIVE

RIVERSIDE4 APR 16, 2020 07:39PM

grammar - descriptive words song video



Vivid Verbs | Reading & Writing Song for Kids | Verb Song | Jack Hartmann

by Jack Hartmann Kids Music Channel

YOUTUBE

RIVERSIDE4 APR 16, 2020 05:28PM

Grammar - choosing descriptive words

ANONYMOUS APR 17, 2020 11:25PM

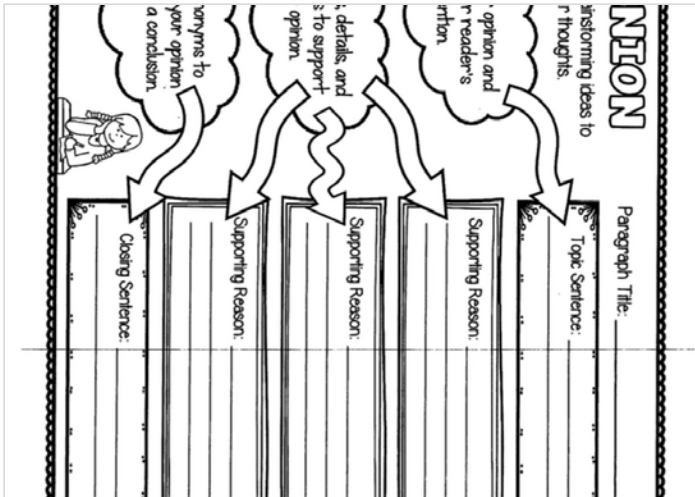
Writing: Week 2 May 11-15 (Opinion Day 2) Pre-Writing and First Draft- "Eliminate that Rule!"

First, use the **Pre-Writing** to organize your ideas into sentences.

Then, write you **First Draft** by using the Pre-Writing page to put all of your sentences together into a **First Draft**.

Finally, make sure you check each box from the check list on

the First Draft page. Use **colors to label** the books to make sure you are not missing anything.



May Writing W2 Opinion Day2

PDF document

PADLET DRIVE

day 8-week 2 (May 13)

RIVERSIDE4 APR 13, 2020 10:32PM

math - divide whole numbers

3. $2 \overline{)287}$ 4. $4 \overline{)1649}$

5. $7 \overline{)708}$ 6. $9 \overline{)7590}$

Solve each problem.

7. Jimmy wants to buy a scooter for \$92. If he does his chores he will earn \$7 each week. How many weeks will it take for him to have enough money to buy the scooter?

8. There are 587 pies at the bake sale. If 9 pies fit on a table, how many tables will need to be set up to display ALL the pies?

school closure math wk2 day 3

PDF document

PADLET DRIVE

ANONYMOUS APR 16, 2020 07:51PM

Math video long division



Long Division WITH Remainders! - Dividing Numbers Fourth Grade Fractions

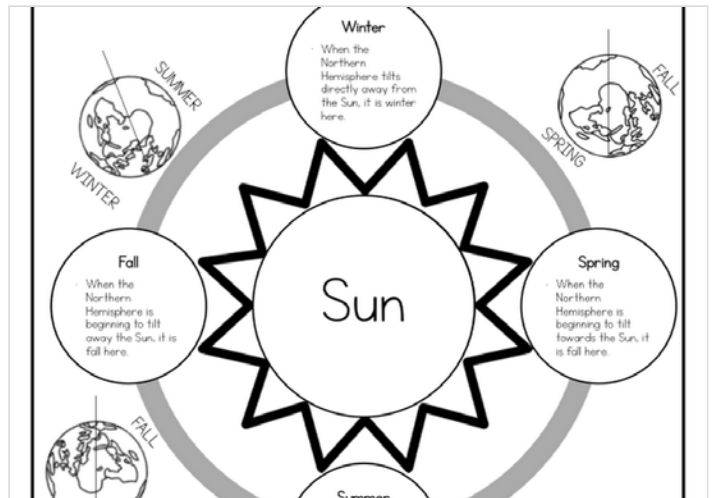
by Math & Learning Videos 4 Kids

YOUTUBE

KATLYN FIELD APR 14, 2020 05:32PM

Science: The Sun & Seasons

Use the diagram provided to answer the given questions about the sun and how it is involved with our seasons.



Day 8 The Sun and seasons

PDF document


PADLET DRIVE

ANONYMOUS APR 15, 2020 11:04PM

Reading reason/evidence

Day 8
 Name: _____ Date: _____ **R.I.4.8**

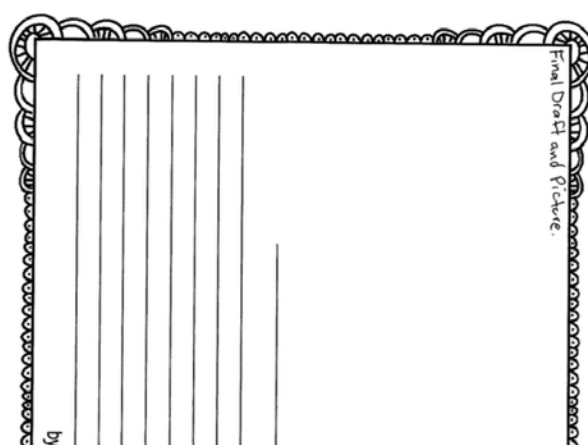
Using Reasons and Evidence
 Read the passage and answer the questions.



There are many different animals on the planet Earth. One of the most spectacular animal is the elephant. Elephants are the largest land animals in the world. They live in families called herds, which is made up of females. The only males in the herd are the young calves. The leader of the herd is the oldest female. The elephant's trunk is one of the most amazing creations. An elephant can pick up something as small as a coin or as large as a tree with its trunk.

1. Based on this author's opinion, why are elephants one of the world's most spectacular animals? Use

school closure ELA wk2 day 3
 PDF document
 PADLET DRIVE



May Writing W2 Opinion Day3
 PDF document
 PADLET DRIVE

RIVERSIDE4 APR 16, 2020 05:29PM

Grammar/vocabulary

Day 8
 Name: _____ Date: _____ **L.4.4.A**

Context Clues for Vocabulary
 Write how many syllables are in each word.

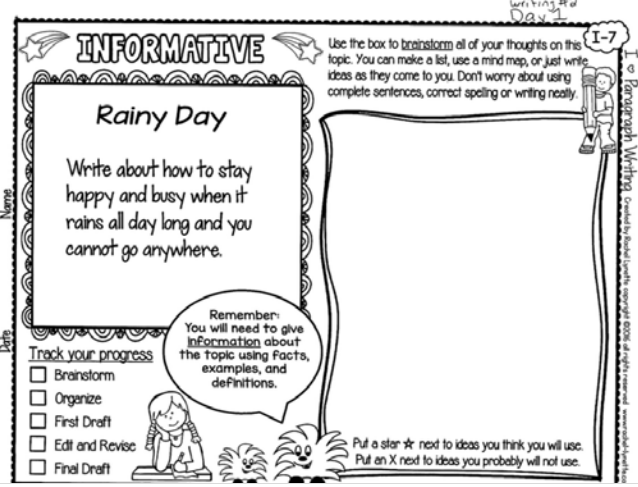
- The farmer took the horses into the _____.
- I would like you to _____ those ideas you have about not studying for the test.
- The most _____ animals in the world might live in the ocean.
- From a very young age, Dylan had a _____ to become a teacher.
- Lukas received so much _____ from his family throughout his schooling.

school closure grammar wk2 day3
 PDF document
 PADLET DRIVE

ANONYMOUS APR 17, 2020 11:30PM

Writing: Week 2 May 11-15 (Informative Day 1) Brainstorming "Rainy Day"

Use the box provided to **Brainstorm** ideas about how to stay happy and busy when it rains all day long and you cannot go anywhere.



May Writing W2 Informative Day1
 PDF document
 PADLET DRIVE

ANONYMOUS APR 17, 2020 11:26PM

Writing: Week 2 May 11-15 (Opinion Day 3) Final Draft with Picture- "Eliminate that Rule!"

Before writing your **Final Draft** and **Drawing a Picture**, please make sure you look over your first draft. Correct spelling, have a sibling or parent read over it and help you, or type it out onto Word!

day 9-week 2 (May 14)

RIVERSIDE4 APR 13, 2020 10:33PM

math - equivalent fractions

3. $\frac{2}{3} \bigcirc \frac{4}{6}$ 4. $\frac{5}{4} \bigcirc \frac{1}{4}$

Write the fraction in simplest form.

5. $\frac{2}{6} = \frac{\quad}{\quad}$ 6. $\frac{50}{100} = \frac{\quad}{\quad}$

Write the pair of fractions as a pair of fractions with common denominator.

7. $\frac{1}{4}$ and $\frac{2}{3}$ 8. $\frac{1}{5}$ and $\frac{3}{4}$

Solve the problem.

9. Marley arranges flowers on the tables at her school. She puts 8 flowers in each vase. Three flowers in each vase are purple. If

school closure math wk2 day 4
 PDF document
 PADLET DRIVE

Name: _____

1. What is Earth's satellite?
 a. Sun
 b. Pluto
 c. The Moon
 d. Neptune

2. How often does the Moon revolve around Earth?
 a. 82 days
 b. 32 days
 c. 26 days
 d. 28 days

3. What color does a new moon appear on Earth?
 a. Red
 b. White
 c. Dark
 d. Pink

4. What fruit does a crescent moon look like?
 a. Banana
 b. Star fruit
 c. Apple
 d. Pineapple

5. What is an effect of the moon orbiting Earth?
 a. People cannot see the moon.
 b. The moon's shape never changes.
 c. A person's view from earth changes.
 d. All of the above

Earth. The Moon is this every 28 days. Moon faces Earth all the light. Moonlight is not's view changes. It of the Moon are the y 28 days. moon is almost dark. f. The next phase of d shape. It looks like s a quarter Moon. A h a crescent missing. t side. A full Moon is s of the sunlit side is new

Day 9 Phases of the Moon
 PDF document
 PADLET DRIVE

ANONYMOUS APR 16, 2020 07:49PM

Math equivalent fractions

Equivalent fractions intro

Khan Academy

Intro to equivalent fractions | Fractions | 4th grade | Khan Academy
 by Khan Academy
 YOUTUBE

KATLYN FIELD APR 14, 2020 05:33PM

Science: Moon Phases

Read the passage to answer the given questions about the moon and it's different phases.

ANONYMOUS APR 15, 2020 11:05PM

reading -support from text

Day 9
 Name: _____ Date: _____ RL.4.1

Support from the Text

Read the passage and answer the question.
 Write your answer in complete sentences.

Jazmin went to school on Wednesday feeling fine. When she came in from recess her stomach did not feel the best. It was Taco Tuesday at school, and she knew she ate too many tacos. Her stomach was doing flips. She asked Mrs. Matthews if she could go to the nurse. Mrs. Matthews said, "Of course, you can go to the nurse."
 When Jazmin returned, she handed the teacher a white piece of paper and said that the nurse called her mom. She grabbed her book bag and coat and headed back to the nurse's office.

school closure ELA wk 2 day 4
 PDF document
 PADLET DRIVE

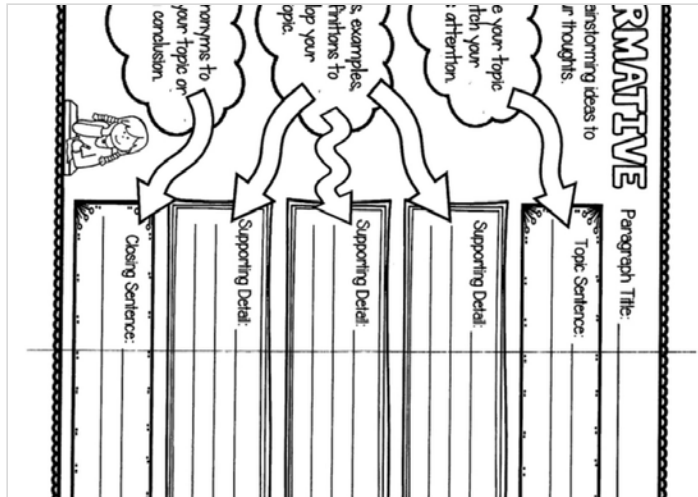
ANONYMOUS APR 17, 2020 11:32PM

Writing: Week 2 May 11-15 (Informative Day 2) Pre-Writing and First Draft-"Rainy Day"

First, use the **Pre-Writing** to organize your ideas into sentences.

Then, write you **First Draft** by using the Pre-Writing page to put all of your sentences together into a **First Draft**.

Finally, make sure you check each box from the check list on the First Draft page. Use **colors to label** the books to make sure you are not missing anything.



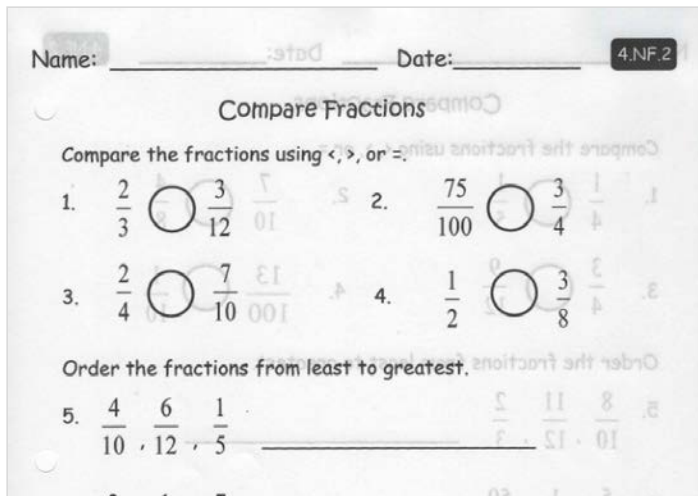
May Writing W2 Informative Day2

PDF document
PADLET DRIVE

day 10 -week 2 (May 15)

RIVERSIDE4 APR 13, 2020 10:34PM

math compare fractions

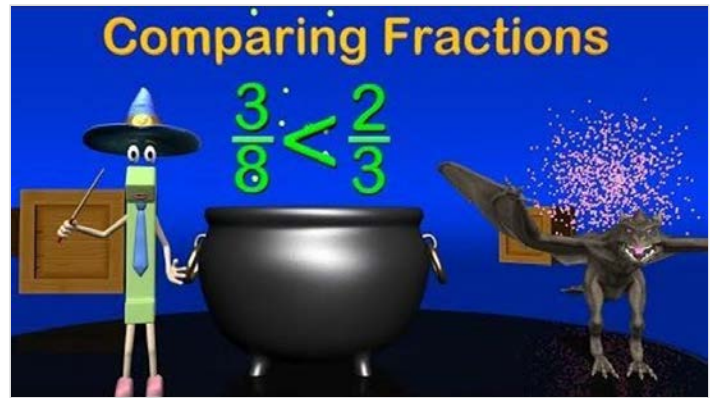


schoolclosure math wk 2day5

PDF document
PADLET DRIVE

ANONYMOUS APR 16, 2020 07:47PM

Math compare fractions



Comparing Fractions - 4th Grade Mage Math

by Math & Learning Videos 4 Kids
YOUTUBE

KATLYN FIELD APR 14, 2020 05:35PM

Moon Phases Vocabulary

Here is vocabulary, matched with it's definition and a picture!
You do not need to cut it out. Use it to help you complete the crossword puzzle!

CONSTELLATION	The figure of the moon as it appears before its first quarter phase or after its third quarter phase.	
CRESCENT MOON	An organization of stars as seen from Earth.	
EQUATOR	An imaginary line circling Earth that is an equal distance from the north pole and the south pole.	
FULL MOON	A line on which an object rotates.	
NEW MOON	The time when the Moon is fully lit as seen on Earth.	

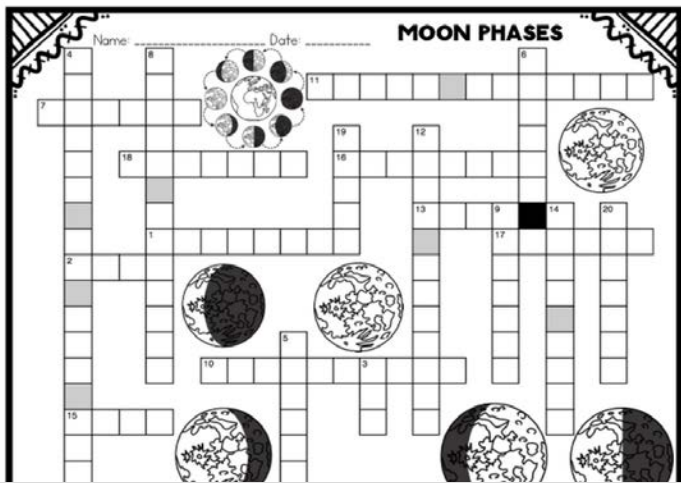
Moon Phases Vocabulary

PDF document
PADLET DRIVE

KATLYN FIELD APR 14, 2020 05:36PM

Science: Moon Phases

Crossword puzzle on vocabulary used about the moon and it's phases. Use the vocabulary sheet above to help.



Day 10 Moon Phases Crossword

PDF document

PADLET DRIVE



Myth of Pandora's Box

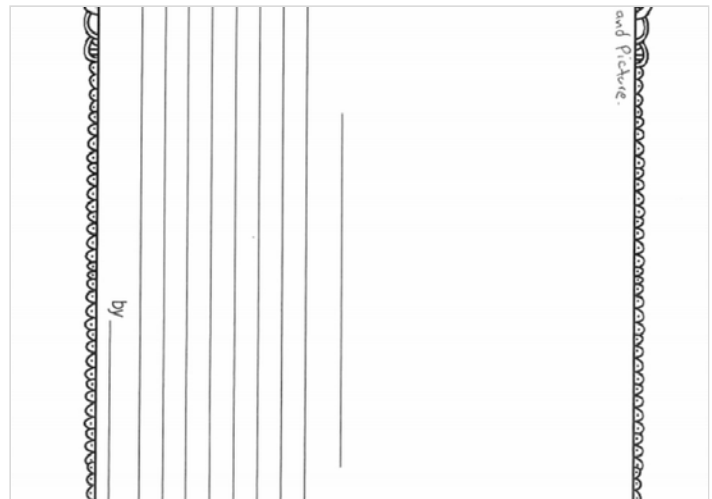
Uploaded by Catherine Mestach on 2013-11-11.

YOUTUBE

ANONYMOUS APR 17, 2020 11:33PM

Writing: Week 2 May 11-15 (Informative Day 3) Final Draft with Picture-"Rainy Day"

Before writing your **Final Draft** and **Drawing a Picture**, please make sure you look over your first draft. Correct spelling, have a sibling or parent read over it and help you, or type it out onto Word!



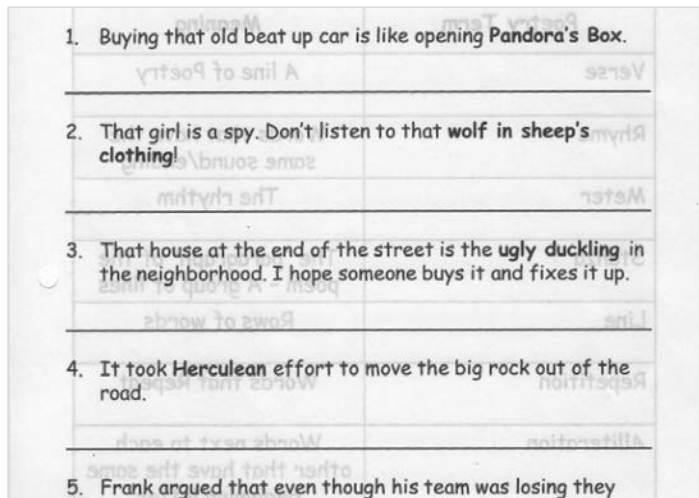
May Writing W2 Informative Day3

PDF document

PADLET DRIVE

ANONYMOUS APR 16, 2020 07:46PM

Reading - mythology allusions



school closure ELA wk2 day 5

PDF document

PADLET DRIVE

RIVERSIDE4 APR 16, 2020 07:49PM

Allusion- story video Pandora's Box

watch the video then write a one paragraph summary.

day 11-week 3 (May 18)

RIVERSIDE4 APR 23, 2020 09:26PM

math -add/sub fractions

Day 11
Name: _____ Date: _____ Week → ③
4.NF.3

Adding & Subtracting Fractions

Rename the mixed number as a fraction.

1. $5\frac{1}{4} = \frac{\quad}{\quad}$ 2. $3\frac{4}{5} = \frac{\quad}{\quad}$

Write the fraction as a sum of unit fractions.

3. $\frac{4}{8} = \frac{1}{8} + \frac{1}{8} + \frac{1}{8} + \frac{1}{8}$ 4. $\frac{7}{10} = \frac{1}{10} + \frac{1}{10} + \frac{1}{10} + \frac{1}{10} + \frac{1}{10} + \frac{1}{10} + \frac{1}{10}$


Find the sum or difference.

5. $\frac{8}{10} + \frac{7}{10} = \frac{\quad}{\quad}$ 6. $3\frac{3}{4} - 2\frac{1}{4} = \frac{\quad}{\quad}$

school closure math may wk3 day 11
PDF document
PADLET DRIVE

Day 11
Name: _____ Date: _____ RL.4.2

Determine Theme



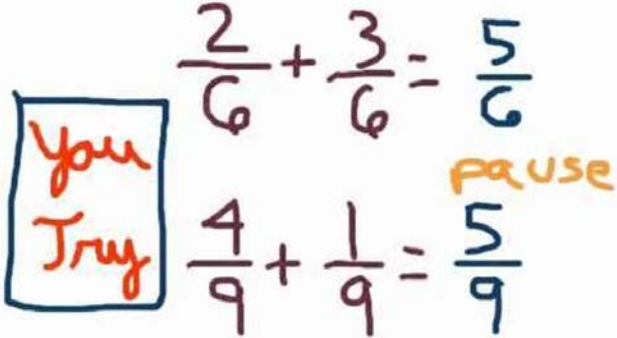
Ashton thought it would be funny to hide Leah's coat. He took it from the back of the room and hid it behind a book shelf. When it was time for recess Leah was looking all over the classroom for her coat. She knew she wore it to school, but she had no idea what could have happened to it.

Everyone started looking for the jacket. The teacher asked everyone if they had seen it. Ashton started to get nervous. He knew if he said anything he would get in trouble.

"No one is going to recess until we find Leah's coat!" the teacher said. The class was now getting upset because they did not want to miss recess. What was Ashton going to do now? He should have just taken the jacket out from behind the shelf when Leah first started looking for it. Eventually he was going to have to speak up or they would never be able to go outside for recess. What should

school closure ELA wk3day11
PDF document
PADLET DRIVE

RIVERSIDE4 APR 24, 2020 10:45PM

math video -add/sub fractions


Adding and Subtracting Fractions with Like Denominators
YOUTUBE

RIVERSIDE4 APR 23, 2020 10:15PM

Reading finding theme

RIVERSIDE4 APR 25, 2020 08:50PM

reading video - finding theme**Introduction to Reading Skills: Identifying Themes in a Story/Fable**

In this fun literacy skills cartoon students will learn how to identify themes in a story as Aesop tells the fable of The Monkey and The Dolphin. Visit www.flexliteracy.com to learn more about this English Language Arts intervention program from McGraw-Hill Education.

YOUTUBE

ANONYMOUS APR 24, 2020 08:23PM

Writing: Week 3 May 18-22 (Opinion Day 1) Brainstorming "Video Games vs. Books"

Use the box provided to **Brainstorm** ideas on would you rather spend an hour playing a video game or reading a book.

Writing Week #3 May 18-22 Writing #1 Day 1

OPINION

Use the box to brainstorm all of your thoughts on this topic. You can make a list, use a mind map, or just write ideas as they come to you. Don't worry about using complete sentences, correct spelling or writing neatly.

Video Games vs. Books

Would you rather spend an hour playing a video game or reading a book? Write a paragraph about your choice.

Remember: You will need to form a clear opinion about the topic and then support that opinion with facts, details, and examples.

Track your progress

- Brainstorm
- Organize
- First Draft
- Edit and Revise
- Final Draft

Put a star ★ next to ideas you think you will use.
Put an X next to ideas you probably will not use.

May Writing W3 Opinion Day1

PDF document

PADLET DRIVE

Name: _____

Stars

of gases. Stars are everywhere in space. The
ve off light and heat. The sun is the easiest star
oorest star to Earth.

pace. Dust and gases come together. They then
er as they grow older. Most stars live for billions
in they explode. Scientists think that a star in our
years.

rs by their size and temperature. In 1905, Ejnar
> kinds of stars, giants and dwarfs. Dwarfs are
as the sun, or smaller. A giant is a star that is at
he sun. A supergiant is a star that is at least one
10,000

olors if you look very closely. Blue stars are the
e the next hottest. White stars are cooler than
s are cooler than white stars. Orange stars are
are cooler than yellow. Red stars are the coolest.

shapes in the sky. People long ago drew imaginary
dot to dot pictures. The lines make shapes like
s shapes are called constellations.

ars that there are too many to count, like the
he solar system is in the Milky Way galaxy, which
niverse, there are billions of galaxies. In each
of stars.

1. How old are stars?
a. Millions of years
b. Thousands of years
c. 1905 years
d. Billions of years

2. When did Ejnar
a. 1905
b. 1805
c. 1705
d. 1900

3. How often do s
explodes in our ga
a. every 100 years
b. every 50 years
c. every 1905 year
d. Billions of year

4. What was the a
writing this passa
a. Entertain the r
b. Entertain the r
c. Persuade reade
d. Inform the rea

5. Which star is c
a. blue
b. light blue
c. red
d. white

Day 11 Stars

PDF document

PADLET DRIVE

RIVERSIDE4 APR 25, 2020 09:00PM

grammar - confusing words

Day 11

Name: _____ Date: _____ L.4.1.G

Frequently Confusing Words

Fill in the correct spelling of the word.

- We would love to go see _____ game tomorrow. (your, you're)
- I wish we could go to the party _____. (to, too, two)
- My parents always think _____ ideas are great. (there, their, they're)
- I think a cactus grows in the _____. (desert, dessert)
- Please don't slam on the _____ when you are driving. (brakes, breaks)

school_closure_grammar_wk3_day11.pdf

PDF document

PADLET DRIVE

KATLYN FIELD APR 24, 2020 08:59PM

Stars

Read the passage in order to answer the questions about stars.

day 12 - week 3 (May 19)

RIVERSIDE4 APR 24, 2020 10:49PM

math video -fractions as decimals

Write $\frac{29}{100}$ as a decimal

Rewrite fractions as decimals

$\frac{29}{100} = \frac{20}{100} + \frac{9}{100}$

Khan Academy

Rewriting fractions as decimals | Math | 4th grade | Khan Academy

by Khan Academy

YOUTUBE

RIVERSIDE4 APR 24, 2020 10:49PM

math-fractions and decimals

Day 12
Name: _____ Date: _____ 4.NF.5

Fractions & Decimals

Write the number as hundredths in fraction form and decimal form.

1. $\frac{2}{10} = \frac{2}{10} = 0.2$ 2. $\frac{5}{10} = \frac{5}{10} = 0.5$

Write the number as tenths in fraction form and decimal form.

3. $\frac{20}{100} = \frac{20}{100} = 0.20$ 4. $\frac{30}{100} = \frac{30}{100} = 0.30$

Find the sum.

5. $\frac{4}{10} + \frac{30}{100} = \frac{40}{100} + \frac{30}{100} = \frac{70}{100} = 0.70$ 6. $\frac{50}{100} + \frac{2}{10} = \frac{50}{100} + \frac{20}{100} = \frac{70}{100} = 0.70$

school closure math may wk3 day12
PDF document
PADLET DRIVE

You can recognize the **character qualities** by what the character thinks, does, or says.

Characters and Character Qualities
by pATRICK mCgHEE
YOUTUBE

RIVERSIDE4 APR 24, 2020 10:49PM

reading-character traits

Day 12
Name: _____ Date: _____ RL.4.9

Themes
Comparing Character Traits

Read the following passage about the two brothers and fill out the graphic organizer below.

Leif and Bradey are identical twin brothers. They live in New York with their little sister Kara. They love to play football together, but they also like their own things. Leif loves to ride his bike and jump on the trampoline. Bradey would rather stay indoors and play Fortnite. No matter what time of the year, both boys love to help their dad outside. Sometimes they help with the garden, and other times they help him chop wood. No matter what they are doing, they love being with their dad. They both hope to grow up and be a teacher just like him. Leif would rather be a gym teacher and Bradey would rather be

school closure ELA wk3 day 12
PDF document
PADLET DRIVE

RIVERSIDE4 APR 25, 2020 08:48PM

reading character traits video

ANONYMOUS APR 24, 2020 08:25PM

Writing: Week 3 May 18-22 (Opinion Day 2) Pre-Writing and First Draft- "Video Games vs. Books"

First, use the **Pre-Writing** to organize your ideas into sentences.

Then, write you **First Draft** by using the Pre-Writing page to put all of your sentences together into a **First Draft**.

Finally, make sure you check each box from the check list on the First Draft page. Use **colors to label** the books to make sure you are not missing anything.

May Writing W2 Opinion Day2
PDF document
PADLET DRIVE


grammar - commas

2. I am so happy today. I am going to hang out with friends.

3. The dog was so cute. It was soft to pet.

4. I love playing softball. It is so much fun.


5. The sun is so hot. Everyone wants to jump in the pool.



school_closure_grammar_wk3_day12.pdf
PDF document
PADLET DRIVE

Stars

Fill in the crossword puzzle based on different vocabulary used about the galaxy and stars.



Day 12 Stars Crossword
PDF document
PADLET DRIVE

day 13-week 3 (May 20)

Math-decimals/money

Day 13
Name: _____ Date: _____ 4.NF.6

Fractions, Decimals, & Money

Write the fraction or mixed number as a decimal.

1. $\frac{7}{10} =$ _____ 2. $5\frac{2}{10} =$ _____

3. $\frac{80}{100} =$ _____ 4. $8\frac{3}{100} =$ _____

5. $\frac{70}{100} =$ _____ 6. $1\frac{40}{100} =$ _____

7. $\frac{8}{100} =$ _____ 8. $7\frac{1}{100} =$ _____

school closure math may wk3 day13
PDF document
PADLET DRIVE

Reading- listen to the story then write 2 paragraph summary. Draw a picture of your favorite scene.



Kids Book Read Aloud: A BAD CASE OF STRIPES by David Shannon
by StoryTime at Awnie's House
YOUTUBE

Writing: Week 3 May 18-22 (Opinion Day 3) Final Draft with Picture- "Video Games vs. Books"

Before writing your **Final Draft** and **Drawing a Picture**, please make sure you look over your first draft. Correct spelling, have a sibling or parent read over it and help you, or type it out onto Word!

May Writing W2 Opinion Day3

PDF document

PADLET DRIVE

ANONYMOUS APR 24, 2020 08:41PM

Writing: Week 3 May 18-22 (Narrative Day 1) Brainstorming "A Thousand Dollars"

Use the box provided to **Brainstorm** ideas on how you would spend \$1000 dollars.

May Writing W3 Narrative Day1

PDF document

PADLET DRIVE

RIVERSIDE4 APR 25, 2020 09:08PM

grammar video - using punctuation

Punctuation for Kids: Period, Exclamation Mark, Question Mark| English Grammar | Kids Academy

by Kids Academy

YOUTUBE

RIVERSIDE4 APR 25, 2020 09:06PM

grammar - choose correct punctuation

Fill in the missing punctuation. Use some or all of the following:

Period . Exclamation mark ! Question mark ? Apostrophe ' Comma , Quotation marks " " Semi Colon ; Colon :

Jack and the Beanstalk

Folk Tale

Once upon a time there was a poor widow who had an only son named Jack and a cow named Milky White And all they had to live on was the milk the cow gave every morning which they carried to the market and sold But one morning Milky White gave no milk and they didn't know what to do

What shall we do What shall we do said the widow wringing her hands

Cheer up mother Ill go and get work somewhere said Jack

Weve tried that before and nobody would take you said his mother We must sell Milky White and with the money start a shop

school_closure_grammar_wk3_day13.pdf

PDF document

PADLET DRIVE


KATLYN FIELD APR 24, 2020 09:01PM

Constellations

Use the diagram provided to answer the different questions about constellations.

Name: _____

CONSTELLATIONS



Stars are always present, even during the day.

Stars appear to move across the sky at night, but they don't.

People have recognized constellations for thousands of years.

Day 13 Constellations
PDF document
PADLET DRIVE

Compare using $<$, $>$, or $=$.

9. 4 hours 400 minutes 10. 1 kilogram 1,000 grams

11. 4 meters 40 cm 12. 3 feet 40 inches

13. 5 tons 5,000 lbs 14. 94 pints 5 gallons

Solve the problem.

15. Katrina's baby sister weighed 7 pounds. How many ounces does her baby sister weigh?

16. The umbrella is 3 meters tall. How many centimeters tall is the umbrella?


17. What is the better estimate for the length of a car, 12 miles or 12 feet?

school closure math may wk3 day 14
PDF document
PADLET DRIVE

day 14-week 3 (May 21)

RIVERSIDE4 APR 24, 2020 10:52PM

math song video



NUMBEROCK
INCHES FEET & YARDS


Inches, Feet and Yards Song | Measurement Song | Customary Units
by Math Songs by NUMBEROCK
YOUTUBE

RIVERSIDE4 APR 23, 2020 09:29PM

math-units of measure

RIVERSIDE4 APR 24, 2020 10:53PM

math video



NUMBEROCK
OUNCES POUNDS TONS

Ounces , Pounds, & Tons Song ★ Customary Units of Measurement
by Math Songs by NUMBEROCK
YOUTUBE

RIVERSIDE4 APR 23, 2020 10:18PM

reading- point of view

grammar - roots/affixes

Day 14
 Name: _____ Date: _____ RL.4.6

Point of View

Write if the sentences are in first, second, or third person.

- You need to close the door when you come into the house.
- She ran down the hall looking for her teacher. She needed to get back in the room to get her lunch box.
- I can not wait to play in the game this weekend against my cousin.
- He is always calling out in math class.
- Write a sentence in first person.

school closure ELA wk3 day 14
 PDF document
 PADLET DRIVE

- Contra (meaning - against) _____
- Aqua (meaning - water) _____

Read the sentence and answer the following questions

- A television is a machine that uses signals sent from far away to make pictures people can watch. The root tele means far away. What does the root vis mean??

- The root photo means light. What does the word photograph mean?

- Geology is the study of the biological, chemical, and physical history of the earth. The root logy means the study of

school_closure_grammar_wk3_day14.pdf
 PDF document
 PADLET DRIVE

Writing: Week 3 May 18-22 (Narrative Day 2) Pre-Writing and First Draft- "A Thousand Dollars"

First, use the **Pre-Writing** to organize your ideas into sentences.

Then, write you **First Draft** by using the Pre-Writing page to put all of your sentences together into a **First Draft**.

Finally, make sure you check each box from the check list on the First Draft page. Use **colors to label** the books to make sure you are not missing anything.

Day 2

NARRATIVE

Use your brainstorming ideas to organize your thoughts.

Introduce your topic and catch your reader's attention.

Tell about the event or experience in order, using description and detail.

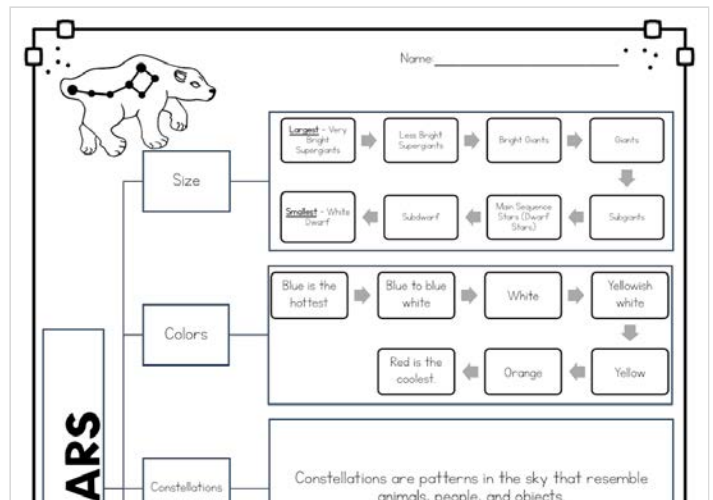
Finish with a conclusion that wraps up the story.

Paragraph Title: _____
 Topic Sentence: _____
 Beginning: _____
 Middle: _____
 End: _____
 Closing Sentence: _____

May Writing W3 Narrative Day2
 PDF document
 PADLET DRIVE

Stars & Constellations

Use the diagram provided to answer different questions about stars and constellations.



Day 14 Stars and Constellations
 PDF document
 PADLET DRIVE


day 15-week 3 (May 22)

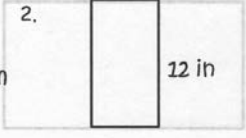
math-area/perimeter

Day 15
Name: _____ Date: _____ 4.MD.3

Area & Perimeter

Find the area and perimeter.

1.  16 cm 4 cm

2.  3 in 12 in

Find the missing side.

3. Area = 40 square feet

4. perimeter = 42 meters

school closure math may wk3 day15

PDF document


PADLET DRIVE

Reading and understanding

Answer these questions about the second extract by Charles Dickens in the previous exercise.
The third paragraph describes the kind of work that the men and boys did.
Can you explain briefly what it was?

Can you complete these old words and phrases from the extract? They match the meanings of the modern words given below.

Modern word	Old word
next to	ab _____ g
rotting	d _____ g
now	of the p _____ i _____ t
journeys	vo _____ s
a lot of	a gr _____ t m _____ y
results	co _____ s
damaged	f _____ d



school closure ELA wk3 day15 pt2

PDF document

PADLET DRIVE

RIVERSIDE4 APR 25, 2020 08:52PM

Math video - area/perimeter



How to Find Area and Perimeter

by Flocabulary

YOUTUBE

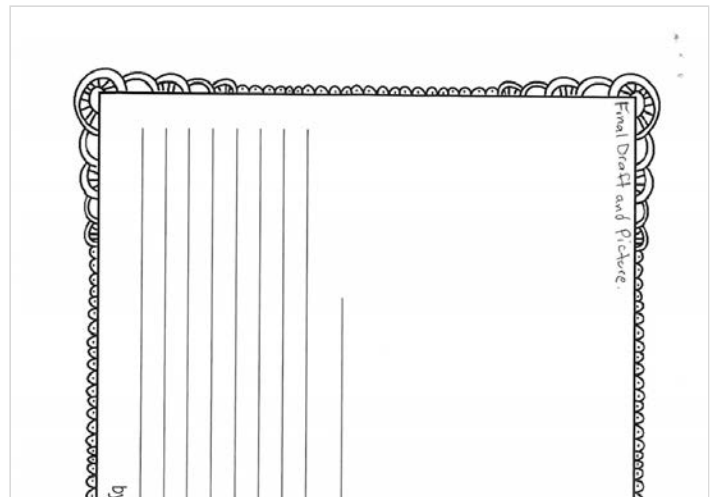
RIVERSIDE4 APR 23, 2020 10:17PM

reading-classic story comprehension part 2

ANONYMOUS APR 24, 2020 08:52PM

Writing: Week 3 May 18-22 (Narrative Day 3) Final Draft with Picture- "A Thousand Dollars"

Before writing your **Final Draft** and **Drawing a Picture**, please make sure you look over your first draft. Correct spelling, have a sibling or parent read over it and help you, or type it out onto Word!



May Writing W3 Narrative Day3

PDF document

PADLET DRIVE

RIVERSIDE4 APR 25, 2020 08:44PM

grammar - antonyms/synonyms

Circle the synonym in parenthesis for each underlined word.

6. My sister saw a miniature pony in the field. (cute, small)
7. Chuck's aunt is too elderly to go to the mall. (old, hurt)
8. Aren't you exhausted after last night? (crazy, tired)


Write whether the two words are synonyms or antonyms.

9. Sour, tart _____
10. Permanent, temporary _____
11. Dull, sharp _____


Write your own synonym and antonym.

Synonym _____

Antonym _____



school_closure_grammar_wk3_day_15.pdf
 PDF document
 PADLET DRIVE

Standard 

What makes stars and planets different or similar?

What is the Hubble Telescope? Why is it important? Why are its pictures so much clearer than a regular telescope?

net?

Day 15 The Star Standard
 PDF document
 PADLET DRIVE

KATLYN FIELD APR 24, 2020 09:05PM

The Star Standard

Answer the 4 different questions given about stars to create a newspaper article. Draw pictures to go with each of your answers. Make sure to use all the materials given to you, to help your answers!

※※※※※